

# MATH SUPERSTARS – 1

Venus, I

Name: \_\_\_\_\_

(This shows my own thinking.)



1. Sasha needs



She has .

How many more must she get?

Answer: \_\_\_\_\_ 



2. Five little  flying high.

Seven more come to sit nearby.

How many  in all?

Answer: \_\_\_\_\_  in all



3. Amanda reads 2 books a week.

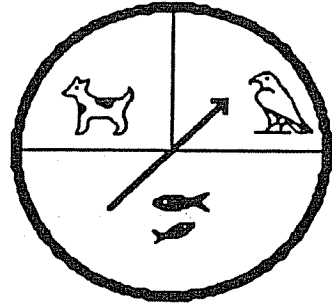
How many books does she read in 6 weeks?

Answer: \_\_\_\_\_ books






4. Julio will use the spinner to find out what pet his parents will buy. Which pet will he probably get?





Circle the answer.

dog      bird      fish



5. Make a graph to show the birthdays. Draw a  for each child.

September: 

October: 

November: 

Fall Birthdays

September								
October								
November								



6. Draw the picture that comes next:

