

MATH SUPERSTARS – 2

Earth, XXV

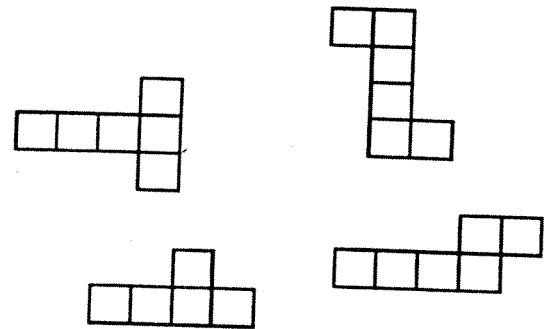
Name: _____

(This shows my own thinking.)

- ★★★ 1. Sharon has 4 baseballs and 6 softballs. She also has 8 bats. Does she have more bats or more balls? How many more?

Answer: She has _____ more _____ than _____.

- ★★★ 2. Circle the drawings that fold and make a cube.




- ★★★ 3. Jon is at the County Fair. He wants to go for rides on the ferris wheel. Today he can ride 5 minutes for 3 tickets. He has 18 tickets left. How many minutes in all can Jon ride on the ferris wheel?

Answer: _____ minutes

- ★★ 4. Susie scored 37 points in her first bowling game. She scored 20 points more in her second game than she did in her first. What was her total score for both games?

Answer: _____ points

- ★★ 5. Markus has to be at school at 8:00. The time he leaves his house is shown on the clock. How long does he have to get to school?




Answer : _____ minutes

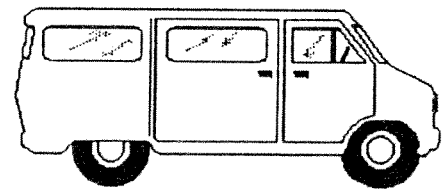
- ★★ 6. Kim needs 10 inches of ribbon to make a bookmark. A spool of ribbon has 86 inches. Can Kim make a bookmark for each of her 9 friends from one spool of ribbon?

Answer: _____

- ★★ 7. Circle the kite that belongs to Tom. It has a tail with two bows. The bows do not match the pattern on the kite. The pattern on the kite rhymes with “yipes.”



- ★★★ 8. Parents with vans were taking Mr. Axel's class to the zoo. The class has 31 students. If each van holds 7 students, how many vans were needed?



Answer: _____ vans