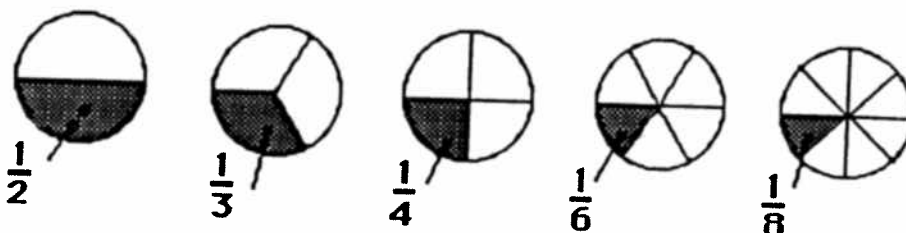


# MATH SUPERSTARS – 1

Venus, XXV

Name: \_\_\_\_\_  
(This shows my own thinking.)


★★★ 1. Which piece of pie is the biggest? Write the fraction.



Answer: \_\_\_\_\_

★★★★ 2. Use the tax chart to find the tax for each item, and then write the total cost of each of the items below.

Tax Chart	
Cost of an item	Tax
From 1¢ to 20¢	1¢
From 21¢ to 40¢	2¢
From 41¢ to 60¢	3¢
From 61¢ to 80¢	4¢
From 81¢ to \$1	5¢




Answer: A pencil costs \_\_\_\_\_. Paste costs \_\_\_\_\_.



Scissors cost \_\_\_\_\_. A ruler costs \_\_\_\_\_.

★★★ 3. Mary had \$5.00. She bought bread for \$1.00 and a candy bar for \$1.00. How much change should she get from the store clerk?

Answer: \_\_\_\_\_

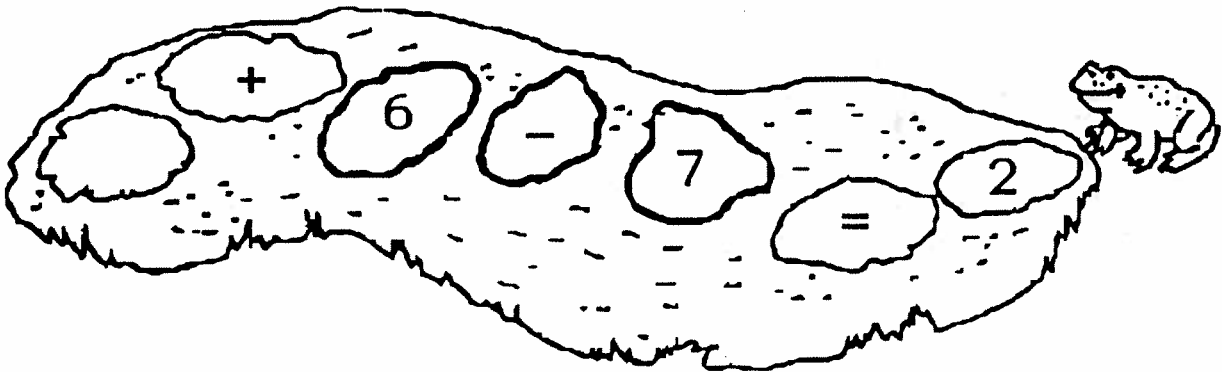
- ★★★★ 4. How many ways are there for 5 mice to live in two houses? Hint! Finish the chart.



	
0	5
1	4

Answer: There are \_\_\_\_\_ ways.

- ★★★ 5. Help Fred Frog hop back across the pond. Fill in the missing number on the lily pad.



- ★★★ 6. Wayne had to pick up a marble without looking. Which one did he probably get, black or white?

Answer: He probably got a \_\_\_\_\_ marble.

